







**REFERENCE
ONLY**

Part I

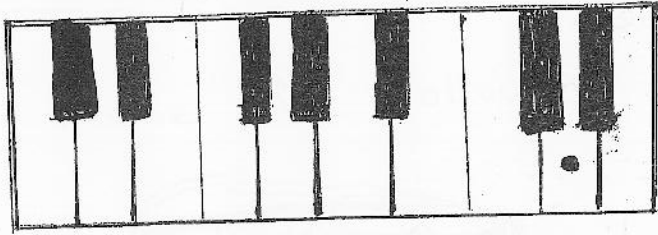
Underline the correct answer.

- We write music notes - - - - -
 - On a staff
 - On a single line
 - On a blank paper.
 - Between double lines.
- Another name for Treble Clef is - - - - -
 - G clef
 - F clef
 - C clef
 - Bass Clef.
- The correct musical Alphabet is.
 - ACEG
 - ABCDEFGG
 - CDEFG
 - ABCDE.
- Which of the following rest is written correctly.
 - 
 - 
 - 
 - 
- Which of the following is taken as Lama Gee.
 - Ash Grove
 - I close my eyes
 - Lanka Lanka
 - Ran Tikiri Sine
- A Harpsichord is.
 - An Old Instrument
 - New Instrument
 - Jazz Instrument
 - Band Instrument.
- Independence Day (4th February) is
 - Social Function
 - National function
 - Religious Function
 - School Function.
- The shortest of the following is
 - o
 - d
 - 
 - 

7. An Instrument usually played in the Senior Western Band in the school.

1. Violin 2. Piano 3. Side drum 4. Organ.

10. The note marked with a dot on this keyboard.



1. C 2. D 3. A 4. G

11. Which of the following name has 3 syllables (beats)

1. Chathuni 2. Mala 3. Seetha 4. Fara.

12. When making improvised Instrument we use of the shell of a coconut.

1. To make a Tambourine 2. To make a drum
3. To make a Coconut 4. To make Shakers.


13. How many beats are there in a Crotchet.

1. 1 2. 2 3. 4 4. 3.

14. Which of the following composition would suit for An Old Music.

1. Pink Panther 2. Entertainer 3. Air On the G String
4. Rhapsody in Bae.

15. Which of the following is highest in Pitch.



1. 2. 3. 4.

16 - 20 Questions are based on the given piece of music.

Fruit-ful fields are wav-ing with the golden grain;

Peace-ful herds are graz-ing on the ver-dant plain.

16. How many bars are there in the above melody

17. Name the Rest at the last bar in the melody.

18. How many bars have Crotchets only _____

19. Circle the Lowest note of the above melody.

20. What is the Clef used in the above song is (Treble / Bass)

Part II

Answer Question No 1 and 02 others.

1 (i) Write the following notes as required. (5 marks).


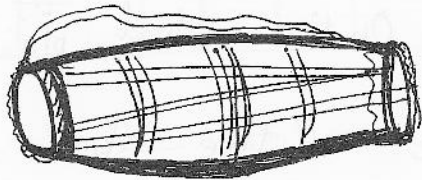
B on a line E in a space A in a space F on a line G on a line.

(ii) Name the following notes. (2 marks).



8/8 Semiquaver note.

(iii) Name the following SriLankan Drums ($\frac{1}{2} \times 2 = 1$)



(iv) Write one note equal in value to the given notes. (2 marks).



02. (i) Mark ✓ or X. (4 marks).

1. Mother's voice Low sound.
2. A semibreve has 2 Counts.
3. Dog Barking is Unpleasant sound.
4. There are only white keys on a Keyboard.

(ii) Name the following Rests. (4 marks)







(iii) Name two Percussion Instruments. (2 marks)

1. _____

2. _____

REFERENCE ONLY

3. (i) Write the number of Counts of the following notes. (3 marks)

			
eg - 1/4			

(ii) Match Each name given under A with the correct sign given under B. (5 marks)


A

B.


1. Stave




2. Double Bar




3. Key Signature



4. Notes



5. Time Signature




(iii) Write 02 man made sounds heard around the school.


1.

2.

4. (i) write one Rest equal to the value of the given notes. (4 marks).



(ii) Write the correct letter names. ($\frac{1}{2} \times 4 = 2$ marks).



(iii) Fill in the Blanks. (4 marks).

1. The stave is made up of the _____ parallel lines.

2. The Bass Clef is also known as _____ clef.

3. Another name for a stave is _____

4. The Musical Alphabet is made up of the first _____ letters of the English alphabet.